


Solving Equations



What are the steps to solve
 $4x - 10 = 2$?



1.



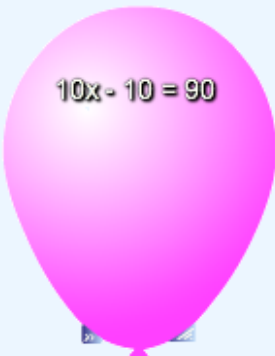
2.

Move the boxes to reveal the answers.

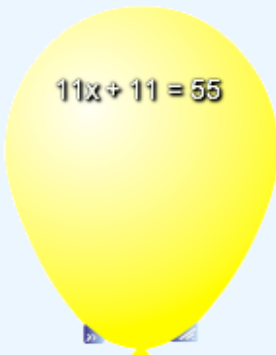
Solve for x.

Press the balloons to pop them and find the answer.


$$2x + 10 = 20$$



$$10x - 10 = 90$$

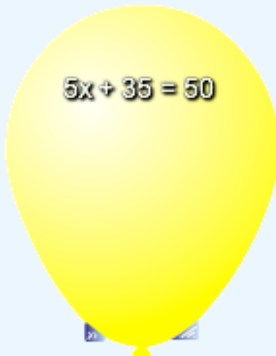

$$2x + 13 = 20$$


$$11x + 11 = 55$$


$$7x + 25 = 39$$


$$8x + 5 = 61$$


$$9x - 9 = 72$$


$$5x + 35 = 50$$